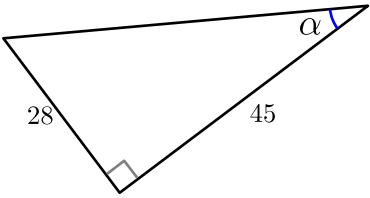
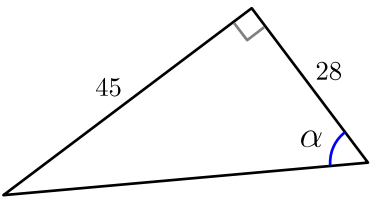
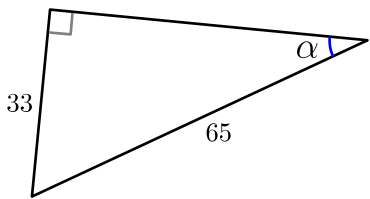
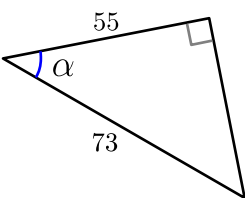
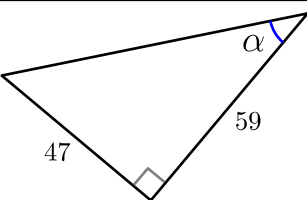
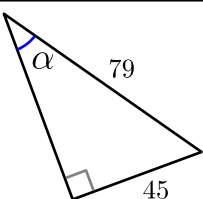
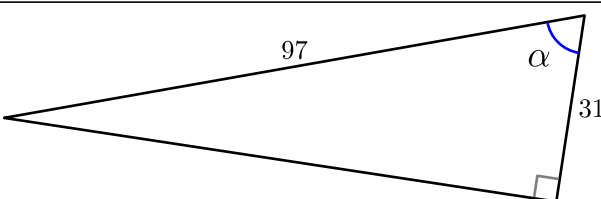
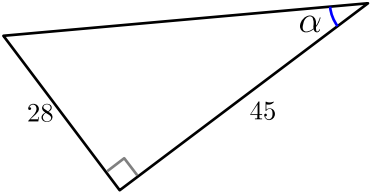
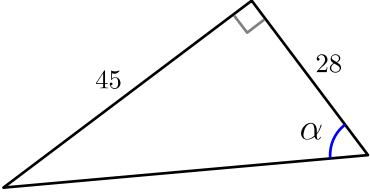
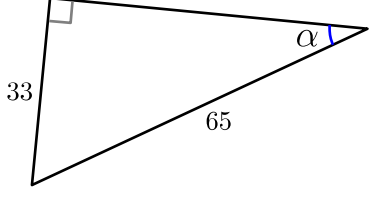
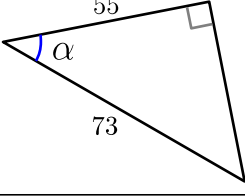
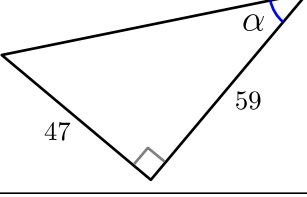
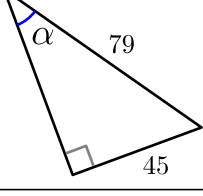
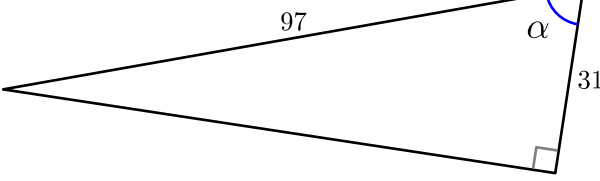


Enunciados

Calcula con cuatro cifras significativas todas las razones trigonométricas del ángulo α en cada uno de los siguientes triángulos.

①		Seno	Coseno	Tangente
		Secante	Cosecante	Cotangente
②		Seno	Coseno	Tangente
		Secante	Cosecante	Cotangente
③		Seno	Coseno	Tangente
		Secante	Cosecante	Cotangente
④		Seno	Coseno	Tangente
		Secante	Cosecante	Cotangente
⑤		Seno	Coseno	Tangente
		Secante	Cosecante	Cotangente
⑥		Seno	Coseno	Tangente
		Secante	Cosecante	Cotangente
⑦		Seno	Coseno	Tangente
		Secante	Cosecante	Cotangente

Soluciones

①		Seno 0,5283	Coseno 0,8491	Tangente 0,6222
		Secante 1,178	Cosecante 1,893	Cotangente 1,607
②		Seno 0,8491	Coseno 0,5283	Tangente 1,607
		Secante 1,893	Cosecante 1,178	Cotangente 0,6222
③		Seno 0,5893	Coseno 0,8615	Tangente 0,5893
		Secante 1,161	Cosecante 1,697	Cotangente 1,697
④		Seno 0,6575	Coseno 0,7534	Tangente 0,8727
		Secante 1,327	Cosecante 1,521	Cotangente 1,146
⑤		Seno 0,6231	Coseno 0,7822	Tangente 0,7966
		Secante 1,279	Cosecante 1,605	Cotangente 1,255
⑥		Seno 0,5696	Coseno 0,8219	Tangente 0,6930
		Secante 1,443	Cosecante 1,756	Cotangente 1,217
⑦		Seno 0,9476	Coseno 0,3196	Tangente 2,965
		Secante 3,129	Cosecante 1,055	Cotangente 0,3373