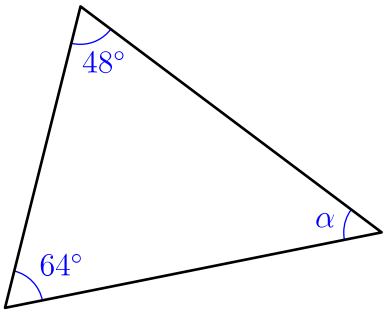
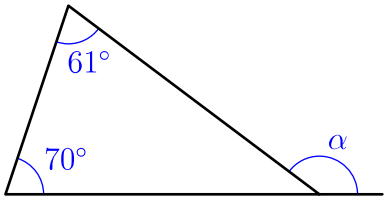
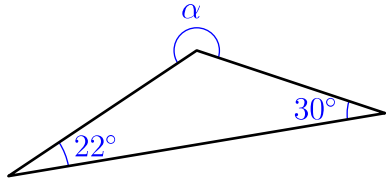
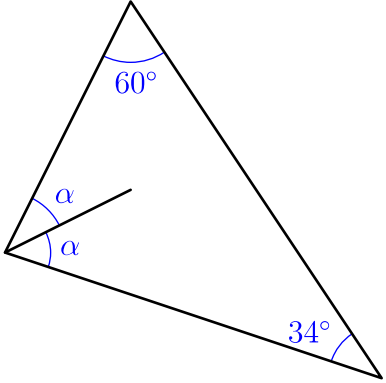
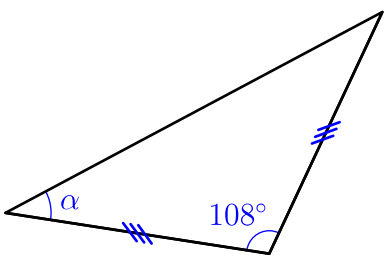
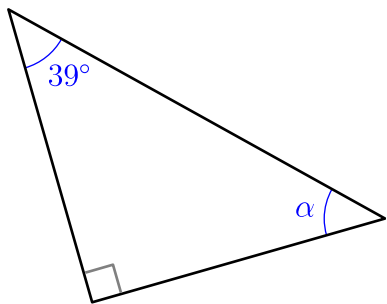
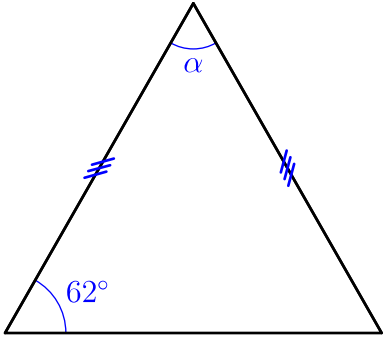
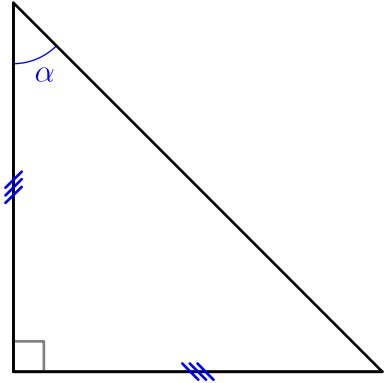
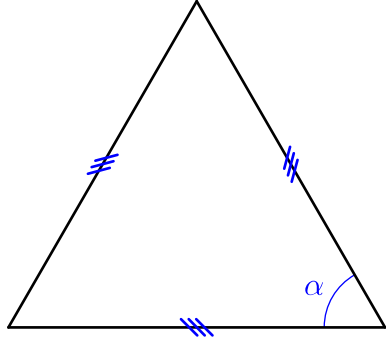
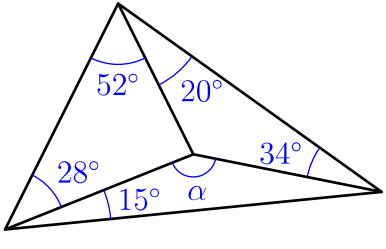
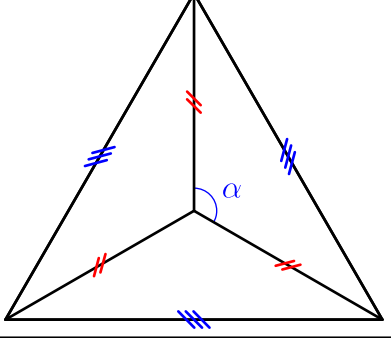
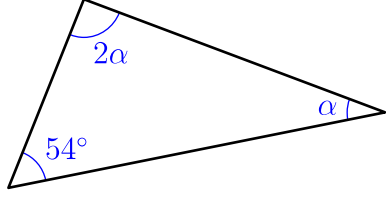
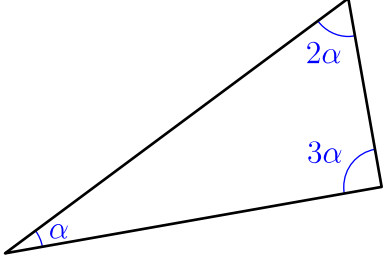
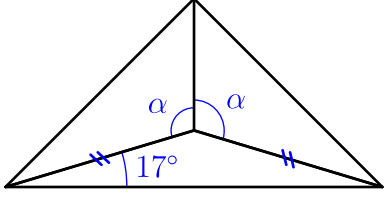
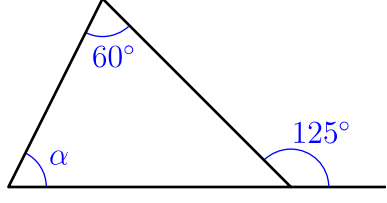


Enunciados

Calcula el valor del ángulo α en cada una de las siguientes figuras:

<p>①</p> 	<p>②</p> 	<p>③</p> 
<p>④</p> 	<p>⑤</p> 	<p>⑥</p> 
<p>⑦</p> 	<p>⑧</p> 	<p>⑨</p> 
<p>⑩</p> 	<p>⑪</p> 	<p>⑫</p> 
<p>⑬</p> 	<p>⑭</p> 	<p>⑮</p> 

Soluciones

- ① $\alpha = 68^\circ$
- ② $\alpha = 131^\circ$
- ③ $\alpha = 232^\circ$
- ④ $\alpha = 43^\circ$
- ⑤ $\alpha = 36^\circ$
- ⑥ $\alpha = 51^\circ$
- ⑦ $\alpha = 56^\circ$
- ⑧ $\alpha = 45^\circ$
- ⑨ $\alpha = 60^\circ$
- ⑩ $\alpha = 134^\circ$
- ⑪ $\alpha = 120^\circ$
- ⑫ $\alpha = 42^\circ$
- ⑬ $\alpha = 30^\circ$
- ⑭ $\alpha = 107^\circ$
- ⑮ $\alpha = 65^\circ$