


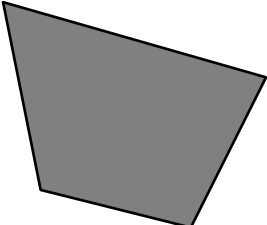

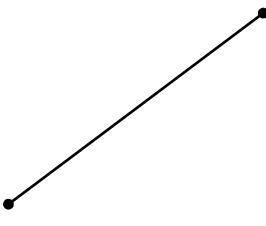
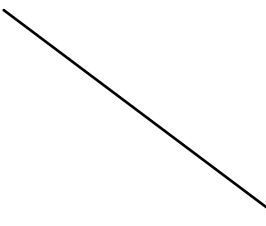
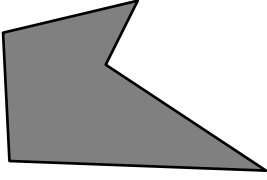
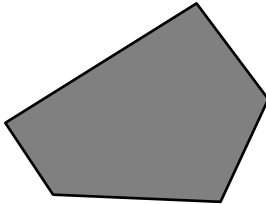



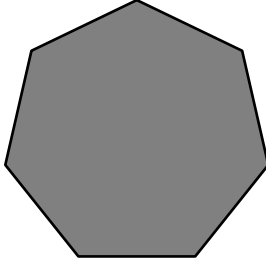









### Enunciados

Di si las siguientes figuras son convexas o cóncavas. Para entender mejor la figura, se ha rellenado de gris su interior, cuando lo tiene. Con cada figura puedes ver su nombre, para que te vayas familiarizando con ellas, puesto que algunas las estudiaremos a continuación.

<p>①</p>  <p>Cuadrado</p>	<p>②</p>  <p>Círculo</p>	<p>③</p>  <p>Triángulo</p>	<p>④</p>  <p>Un cuadrilátero</p>
<p>⑤</p>  <p>Un cuadrilátero</p>	<p>⑥</p>  <p>Segmento</p>	<p>⑦</p>  <p>Recta</p>	<p>⑧</p>  <p>Un pentágono</p>
<p>⑨</p>  <p>Un pentágono</p>	<p>⑩</p>  <p>Un sector circular</p>	<p>⑪</p>  <p>Un sector circular</p>	<p>⑫</p>  <p>Corona circular</p>
<p>⑬</p>  <p>Un polígono regular</p>	<p>⑭</p>  <p>Un polígono estrellado</p>	<p>⑮</p>  <p>Un polígono</p>	<p>⑯</p>  <p>Cardioide</p>
<p>⑰</p>  <p>Rectángulo</p>	<p>⑱</p>  <p>Rombo</p>	<p>⑲</p>  <p>Un polígono</p>	<p>⑳</p>  <p>Elipse</p>

## Soluciones

① Convexa

② Convexa

③ Convexa

④ Convexa

⑤ Cóncava

⑥ Convexa

⑦ Convexa

⑧ Cóncava

⑨ Convexa

⑩ Convexa

⑪ Cóncava

⑫ Cóncava

⑬ Convexa

⑭ Cóncava

⑮ Cóncava

⑯ Cóncava

⑰ Convexa

⑱ Convexa

⑲ Cóncava

⑳ Convexa